

Lecture 6

Circular Motion

Pre-reading: KJF §6.1 and 6.2

Please take a clicker

CIRCULAR MOTION

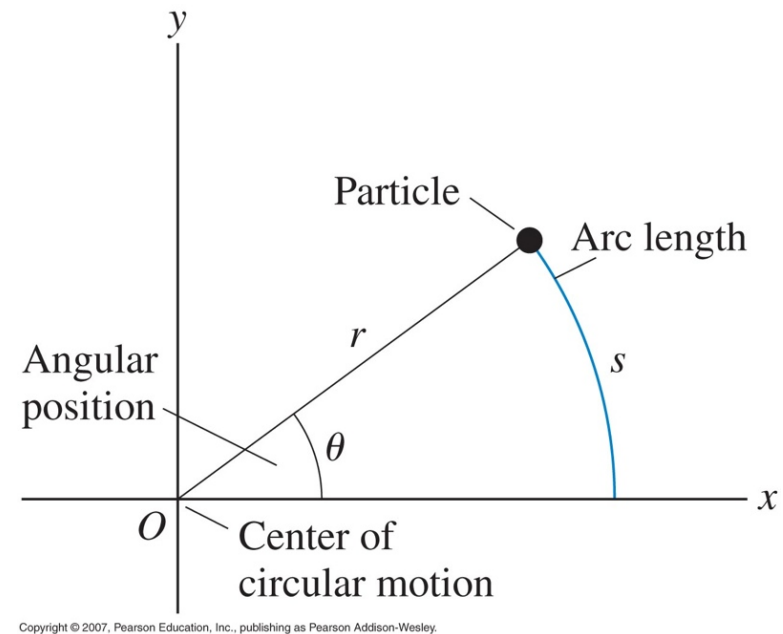
KJF §6.1–6.4

Angular position

If an object moves in a circle of radius r , then after travelling a distance s it has moved an **angular displacement** θ :

$$\theta = \frac{s}{r}$$

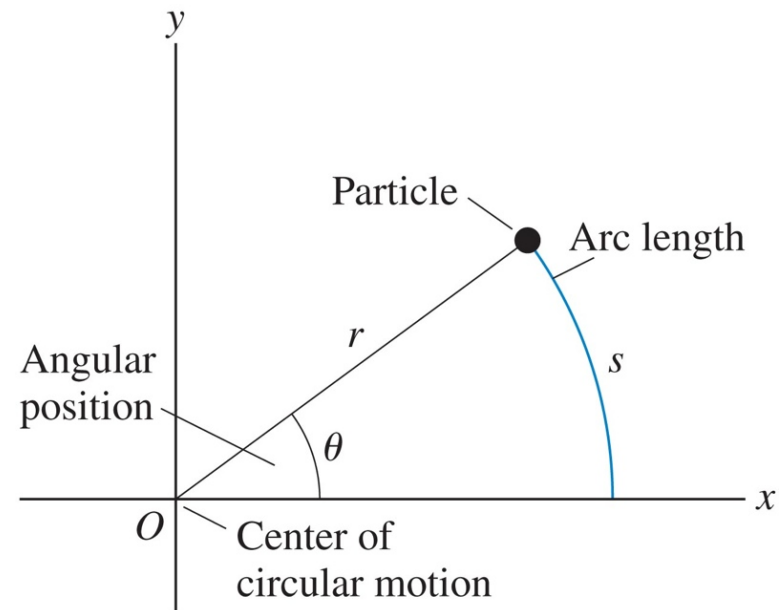
θ is measured in radians
(2π radians = 360°)



Tangential velocity

If motion is *uniform* and object takes time t to execute motion, then it has **tangential velocity** of magnitude v given by

$$v = \frac{s}{t}$$



Copyright © 2007, Pearson Education, Inc., publishing as Pearson Addison-Wesley.

Period of motion T = time to complete one revolution (units: s)

Frequency f = number of revolutions per second (units: s^{-1} or Hz)

$$f = \frac{1}{T}$$

Angular velocity

Define an angular velocity ω

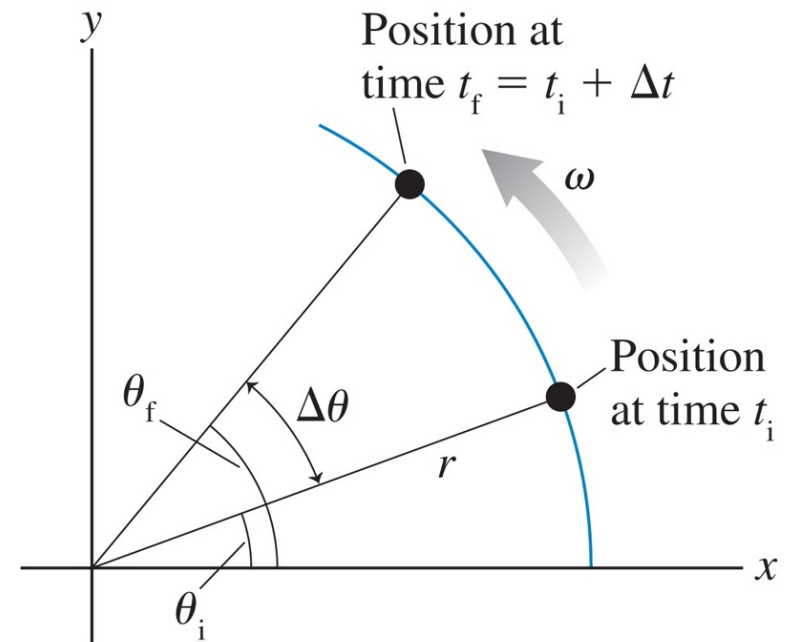
$$\omega = \frac{\text{angular displacement}}{\text{time interval}} = \frac{\theta}{t}$$

Uniform circular motion is when ω is constant.

Combining last 3 equations:

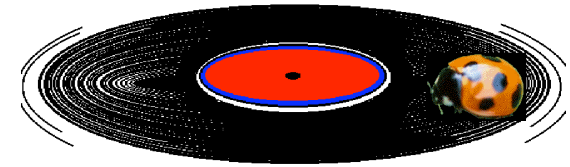
$$v = r\omega$$

period $T = \frac{2\pi}{\omega}$



Question

You place a beetle on a uniformly rotating record



- (a) Is the beetle's *tangential* velocity different or the same at different radial positions?
- (b) Is the beetle's *angular* velocity different or the same at the different radial positions?

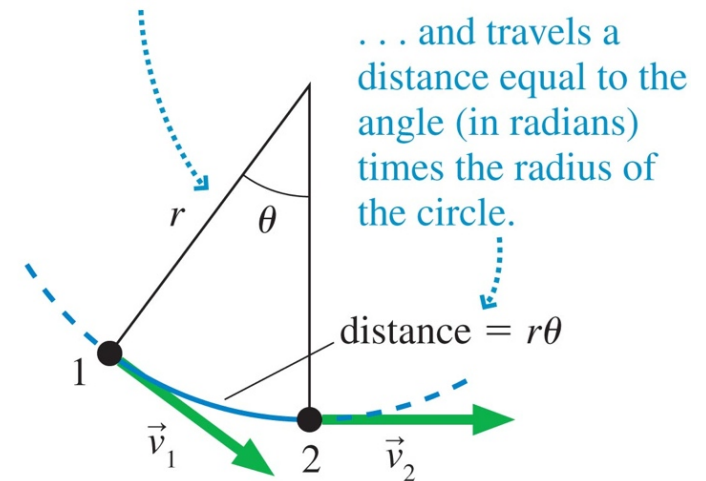
*Remember; all points on a rigid rotating object will experience the **same** angular velocity*

Consider an object is moving in uniform circular motion – tangential speed is constant.

Is the object accelerating?

Velocity is a *vector*
∴ changing direction
⇒ acceleration
⇒ net force

(a) As the car moves from point 1 to point 2, it goes through a circular arc of angle θ . . .



Copyright © 2007, Pearson Education, Inc., publishing as Pearson Addison-Wesley.

The change in velocity

$$\Delta \underline{v} = \underline{v}_2 - \underline{v}_1$$

and $\Delta \underline{v}$ points towards the **centre** of the circle

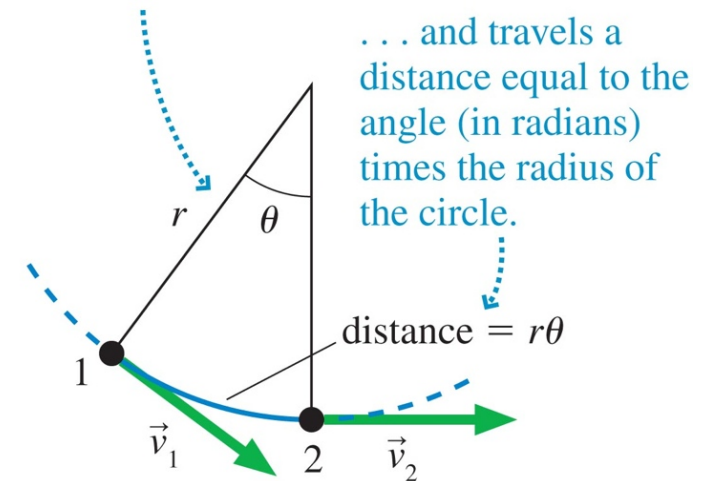
Angle between velocity vector is θ so

$$\Delta v = v\theta$$

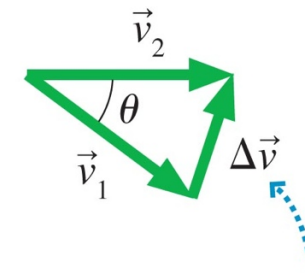
and so

$$a = \frac{\Delta v}{\Delta t} = \frac{v\theta}{r\theta/v} = \frac{v^2}{r}$$

- (a) As the car moves from point 1 to point 2, it goes through a circular arc of angle θ . . .



- (b)



During this motion, the velocity changes direction; the difference vector points toward the center of the circle.

Centripetal acceleration

Acceleration points towards centre

– **centripetal acceleration** a_c

$$a_c = \frac{v^2}{r} = \omega^2 r$$

Since the object is accelerating, there must be a force to keep it moving in a circle

$$F_c = \frac{mv^2}{r} = m\omega^2 r$$

This **centripetal force** may be provided by friction, tension in a string, gravity etc. or combinations.

KJF §6.2 *Examples?*

Note that **centripetal force** is the *name* given to the resultant force: it is **not** a separate force in the free-body diagram.

The centripetal acceleration has to be provided by some other force (tension, friction, normal force) in order for circular motion to occur.

Solving CM problems

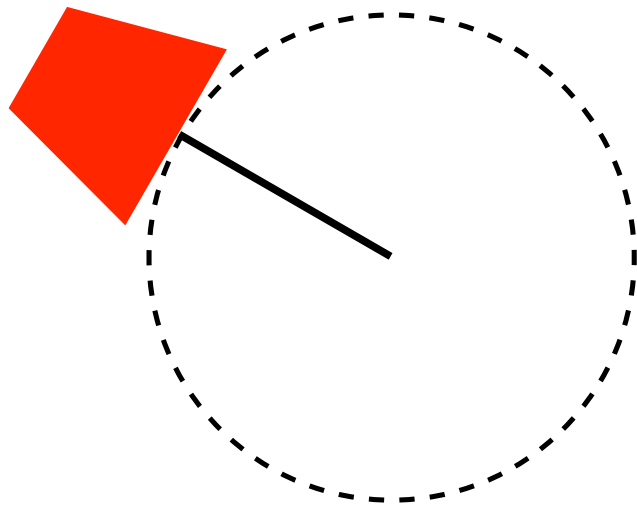
- Draw a free-body diagram
- If the object is moving in a circle, there must be a **net force** pointing towards the centre of the circle.
- The magnitude of this net force is given by

$$F_c = \frac{mv^2}{r} = m\omega^2 r$$

Problem 1



Whirling bucket



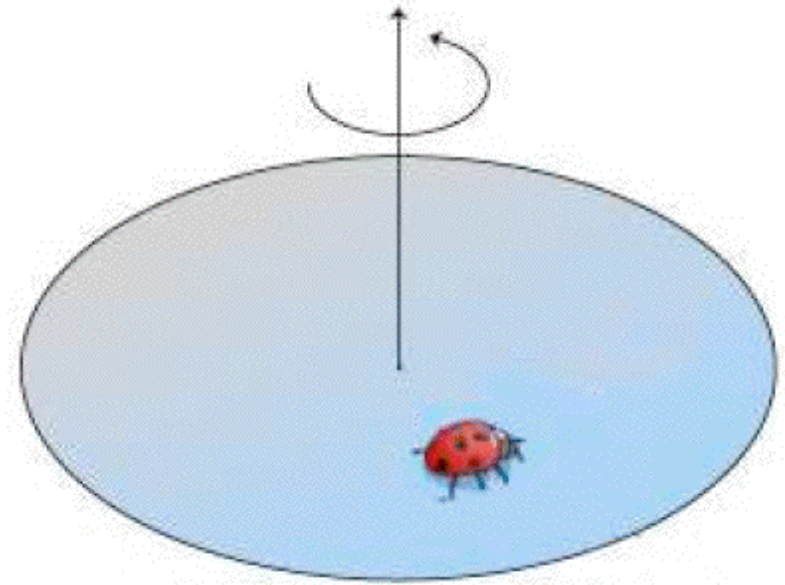
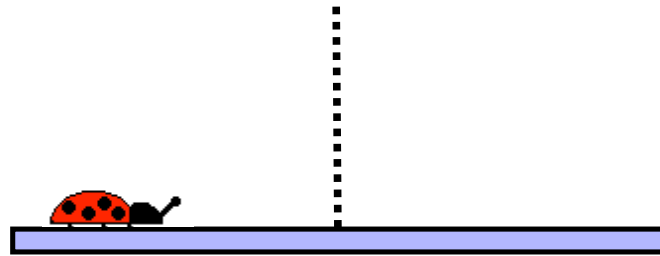
A bucket of water is whirled around in a vertical circle with radius 1m.

What is the minimum speed that it can be whirled so the water remains in the bucket?

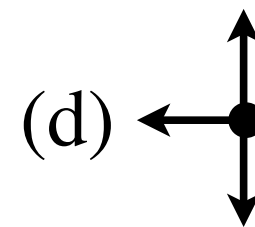
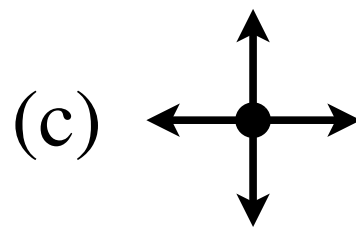
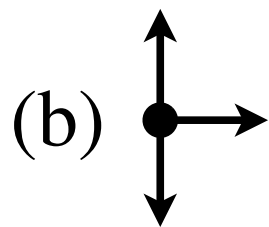
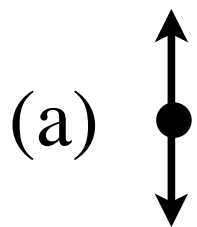
[3 ms⁻¹, or rotation period 2s]

Clicker questions

A beetle is sitting on a rotating turntable. Looking at the turntable side on, so the centre is towards the right:



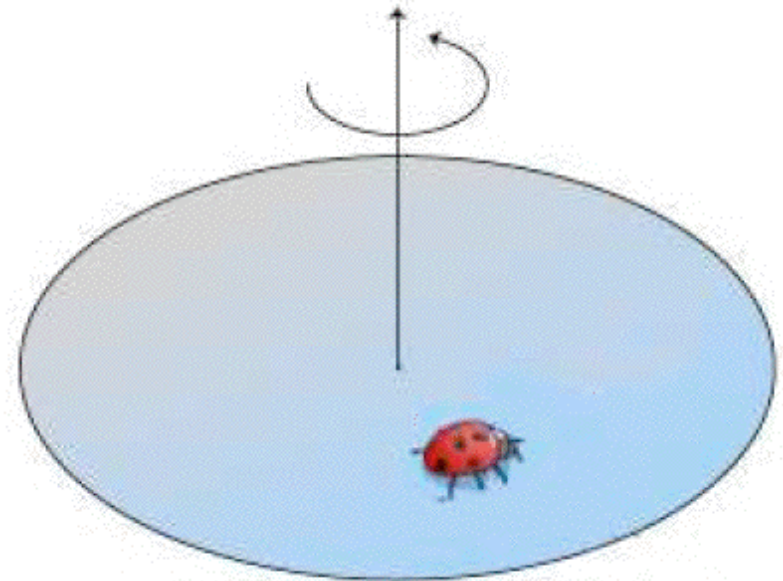
Which diagram correctly shows the forces acting on the beetle?



(e) other

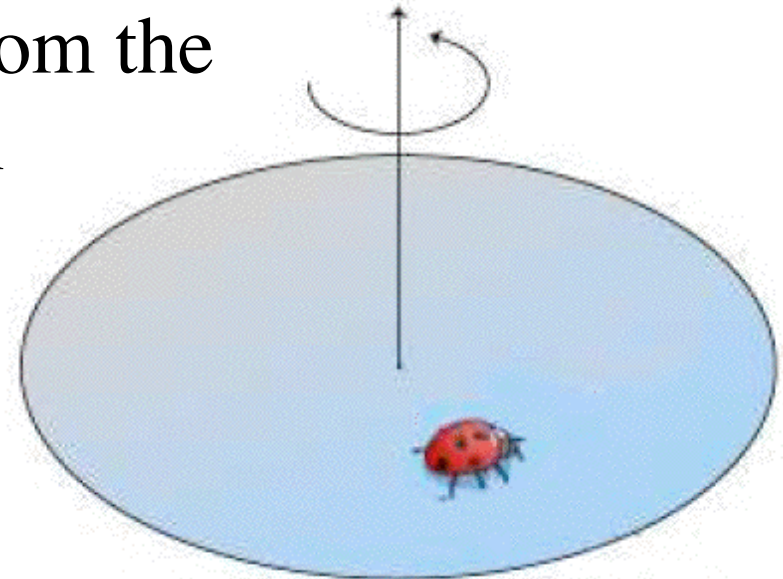
There is a centripetal force acting on the beetle. What provides this force?

- (a) the angular velocity of the turntable
- (b) gravity
- (c) tangential velocity
- (d) friction
- (e) centripetal acceleration
- (f) normal force



The turntable starts to spin faster. Which direction should beetle move so as not to slip?

- (a) inwards
- (b) outwards
- (c) forward in the direction of motion
- (d) backwards away from the direction of motion

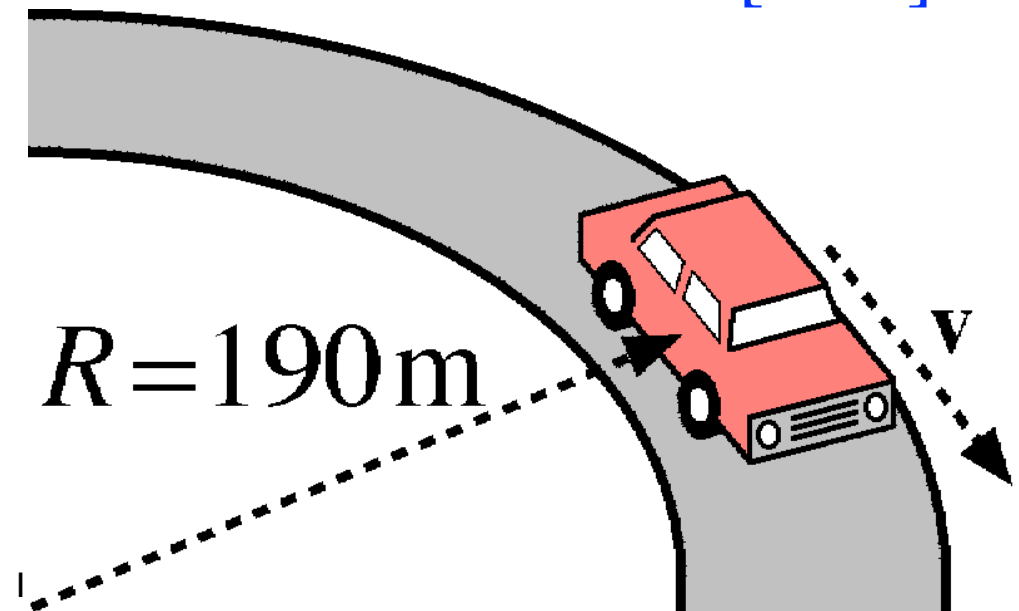


Car around a corner

A car of mass 1.6 t travels at a constant speed of 72 km/h around a horizontal curved road with radius of curvature 190 m. (Draw a free-body diagram)

What is the minimum value of μ_s between the road and the tyres that will prevent slippage?

[0.21]

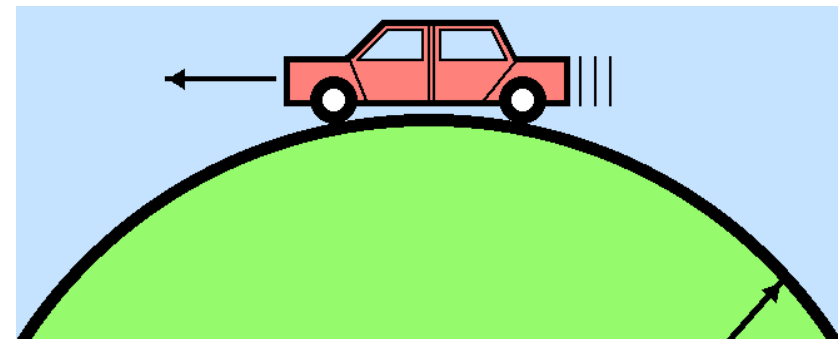


Car over a hill

A car is driving at constant speed over a hill, which is a circular dome of radius 240 m.

Above what speed will the car leave the road at the top of the hill?

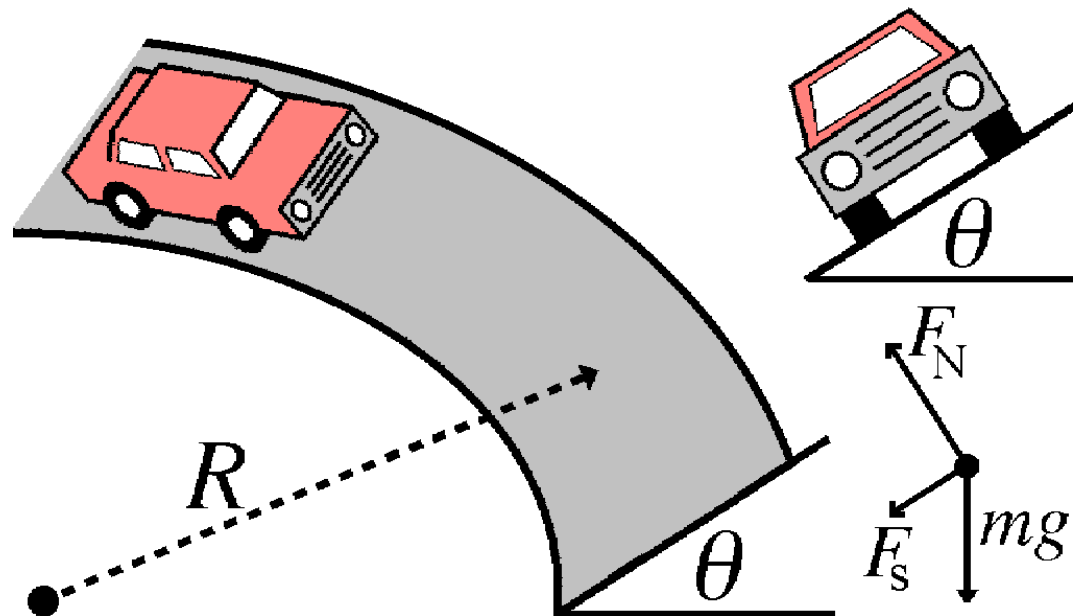
[175 km/h]



$R = 240 \text{ m}$

Banked road

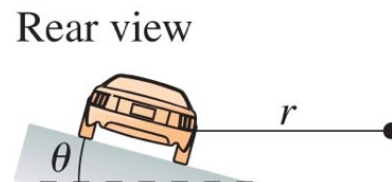
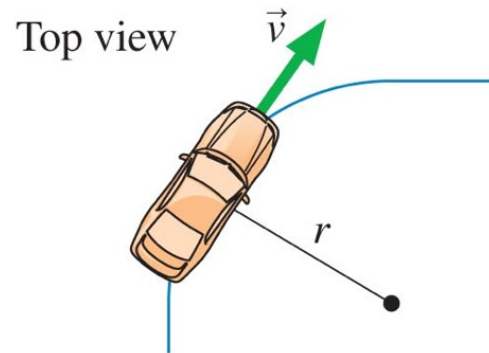
On a curve, if the road surface is "banked" (tilted towards the curve centre) then the horizontal component of the normal force can provide some (or all) of the required centripetal force. Choose v & θ so that less or no static friction is required.



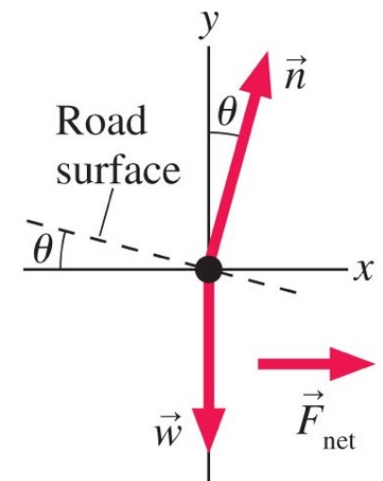
KJF example 6.6

A curve of radius 70m is banked at a 15° angle. At what speed can a car take this curve without assistance from friction?

$$[14 \text{ ms}^{-1} = 50 \text{ km h}^{-1}]$$



Known
 $r = 70 \text{ m}$
 $\theta = 15^\circ$
Find
 v



NEXT LECTURE

Centre of mass and Torque

Read: KJF §7.2, 7.3